



Jesus said that other "sheep" would listen to Him and come into His "sheep pen."

Use the code and fill in the blanks below.



	A	E	I	M	R
	B	F	J	N	S
	C	G	K	O	T
	D	H	L	P	W
	□	♡	○	△	☆



# Children's Worship Bulletin™

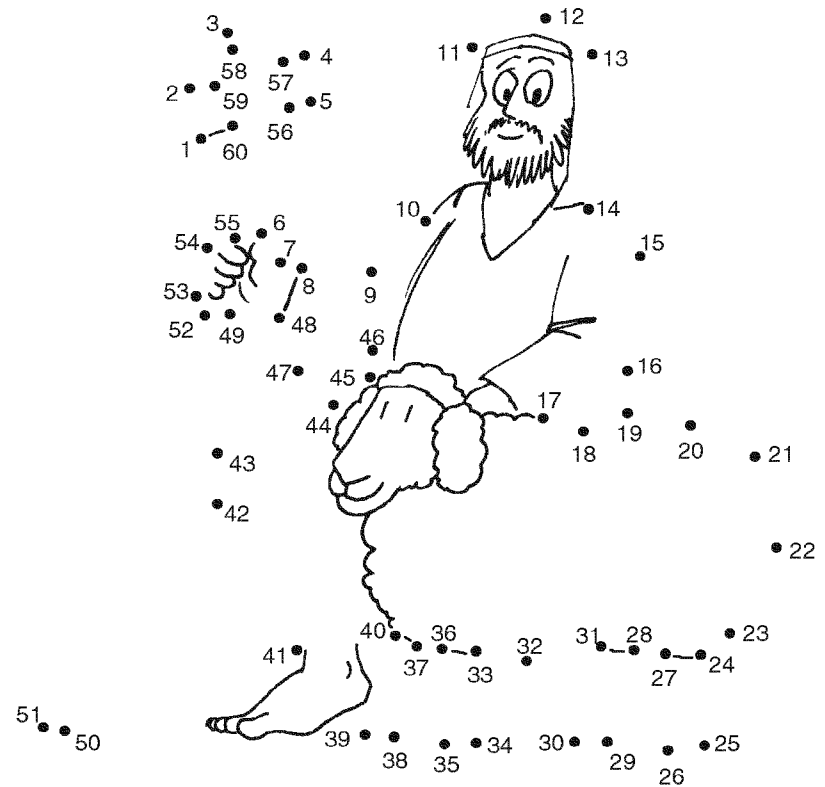
Ages 7+

April 19, 2026 • John 10:11-18

## The Shepherd and His Flock

How does Jesus describe Himself?

Connect the dots.

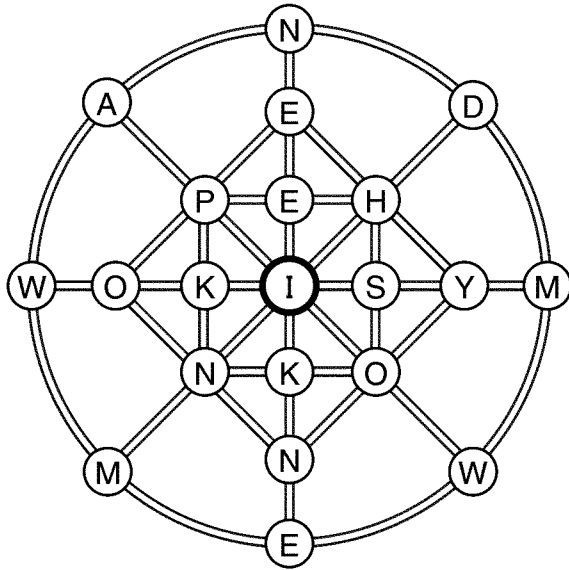



The Good \_\_\_\_\_.

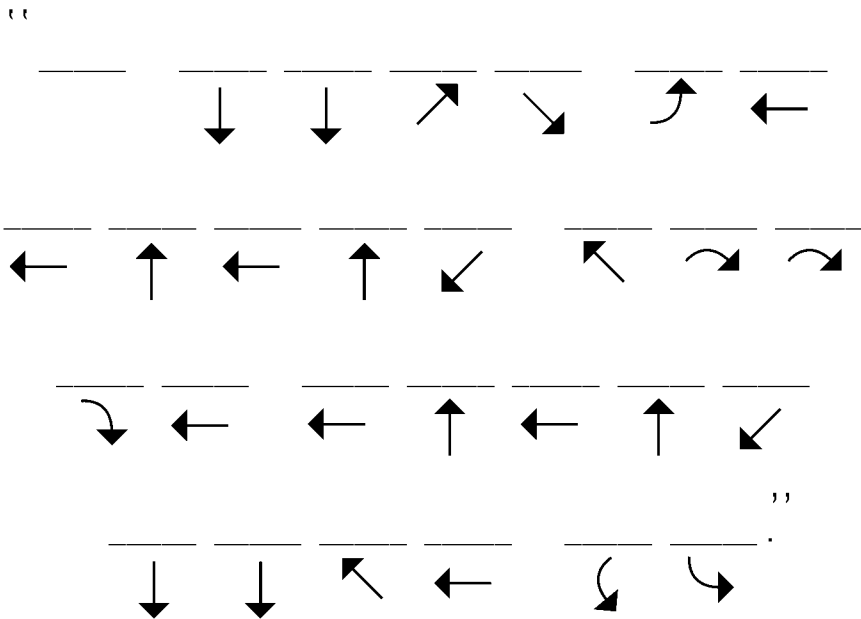


Use the letter wheel to learn what Jesus said about His sheep.

Follow the arrows from letter to letter to find what Jesus said.  
Begin in the middle.



Jesus said,



Shepherds who don't value their sheep run away when wolves come. But what does the Good Shepherd do?

Find the answer to each math problem.

Use the code to find what the Good Shepherd does.

- |       |       |        |        |
|-------|-------|--------|--------|
| 1 = A | 5 = H | 9 = O  | 13 = W |
| 2 = D | 6 = I | 10 = P | 14 = Y |
| 3 = E | 7 = L | 11 = R |        |
| 4 = F | 8 = N | 12 = S |        |

$\frac{3+2}{\quad}$	$\frac{7-4}{\quad}$	$\frac{9-2}{\quad}$	$\frac{5-4}{\quad}$	$\frac{6+8}{\quad}$	$\frac{6+6}{\quad}$
---------------------	---------------------	---------------------	---------------------	---------------------	---------------------

$\frac{4-2}{\quad}$	$\frac{11-2}{\quad}$	$\frac{9+4}{\quad}$	$\frac{3+5}{\quad}$	$\frac{7-2}{\quad}$	$\frac{3+3}{\quad}$	$\frac{6 \times 2}{\quad}$
---------------------	----------------------	---------------------	---------------------	---------------------	---------------------	----------------------------

$\frac{12-5}{\quad}$	$\frac{3 \times 2}{\quad}$	$\frac{2 \times 2}{\quad}$	$\frac{5-2}{\quad}$	$\frac{11-7}{\quad}$	$\frac{2+7}{\quad}$	$\frac{7+4}{\quad}$
----------------------	----------------------------	----------------------------	---------------------	----------------------	---------------------	---------------------

$\frac{9-4}{\quad}$	$\frac{11-5}{\quad}$	$\frac{3+9}{\quad}$	$\frac{24-12}{\quad}$	$\frac{8-3}{\quad}$	$\frac{2+1}{\quad}$	$\frac{1+2}{\quad}$	$\frac{4+6}{\quad}$
---------------------	----------------------	---------------------	-----------------------	---------------------	---------------------	---------------------	---------------------

